

Find someone who can...

Your task is to fill in the sheet by asking your classmates the answers to the questions below

The Rules:

1. You can't answer any of the questions on your sheet yourself.
2. You can only ask a person once.
3. You can't ask the teacher.



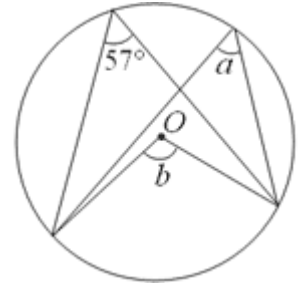
1. Factorise and solve:
 $x^2 + 2x - 15 = 0$

Who:

2. Rationalise the denominator
 $\frac{20}{\sqrt{5}}$

Who:

3. Work out the size of the angles a and b ?



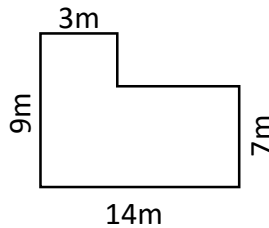
Who:

4. Work out

$$3\frac{1}{4} - 1\frac{2}{3}$$

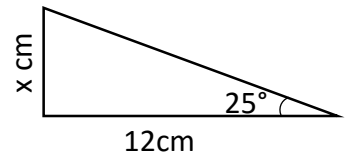
Who:

5. Find the area of this shape



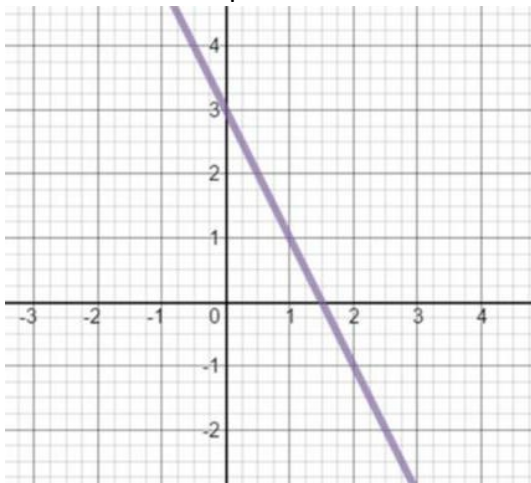
Who:

6. Find x .



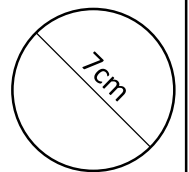
Who:

7. What is the equation of this line?



Who:

8. Work out the area of this circle.



Who: